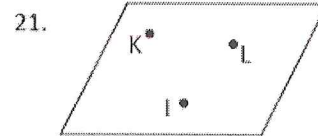
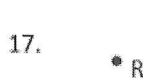
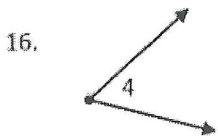
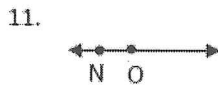
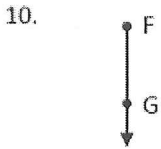
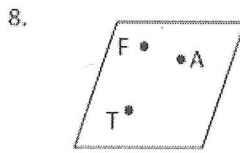
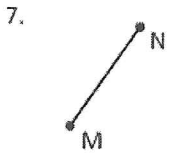
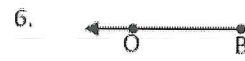
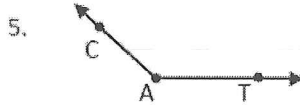
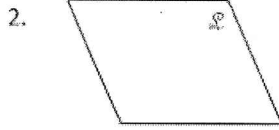
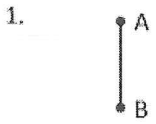


Name Key
 Period _____

1.1 Points, Lines, and Planes Naming Practice HW

Identify the following using symbols, write answer at the bottom of the page.



- | | | |
|-------------------|---------------------|---|
| 1. <u>AB</u> | 8. <u>Plane FAT</u> | 15. <u>AB</u> |
| 2. <u>plane l</u> | 9. <u>line l</u> | 16. <u>< 4</u> |
| 3. <u>XY</u> | 10. <u>FG</u> | 17. <u>point R</u> |
| 4. <u>point T</u> | 11. <u>NO</u> | 18. <u>GP</u> <small>NO 3PTS ONLY USE 2</small> |
| 5. <u><CAT</u> | 12. <u>TB</u> | 19. <u>DE</u> |
| 6. <u>OB</u> | 13. <u>Plane S</u> | 20. <u>UT</u> |
| 7. <u>MN</u> | 14. <u>KJ</u> | 21. <u>Plane KLI</u> |

Hints:

Picture					
Name/Symbol	Point B	\overline{CD}	Line f	$\angle Q$	Plane JKL
Picture					
Name/Symbol	$\angle VET$	Plane M	Line f	$\angle 2$	$\angle 2$

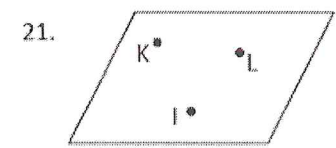
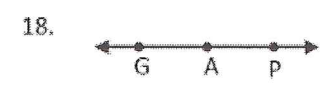
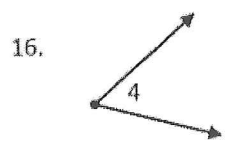

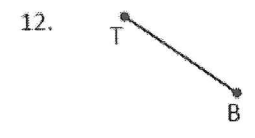
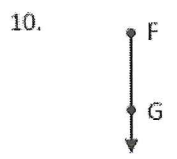
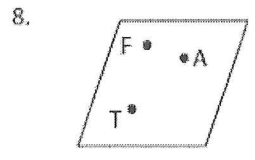
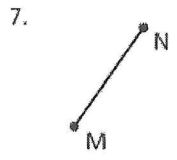
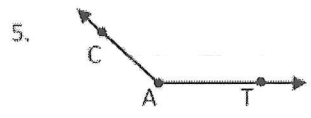

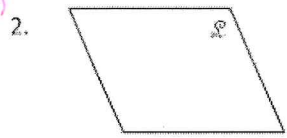

Name _____

Period _____

1.1 Points, Lines, and Planes Naming Practice HW

Identify the following using symbols, write answer at the bottom of the page.

(Notation)



- | | | |
|----------|-----------|-----------|
| 1. _____ | 8. _____ | 15. _____ |
| 2. _____ | 9. _____ | 16. _____ |
| 3. _____ | 10. _____ | 17. _____ |
| 4. _____ | 11. _____ | 18. _____ |
| 5. _____ | 12. _____ | 19. _____ |
| 6. _____ | 13. _____ | 20. _____ |
| 7. _____ | 14. _____ | 21. _____ |

Hints:

Picture

Name/Symbol

Point B \overline{CD} \overline{QR} \overline{OP} JKL $\angle VET$

Line f Plane M