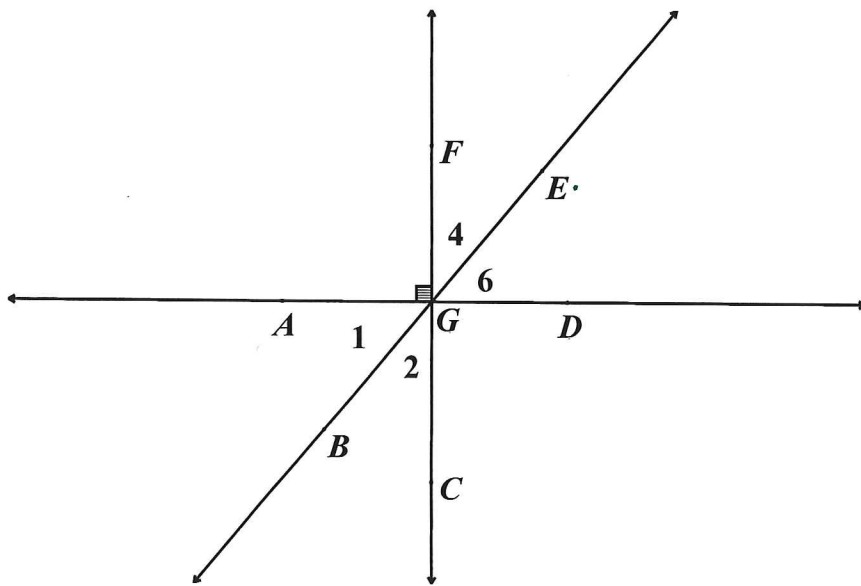
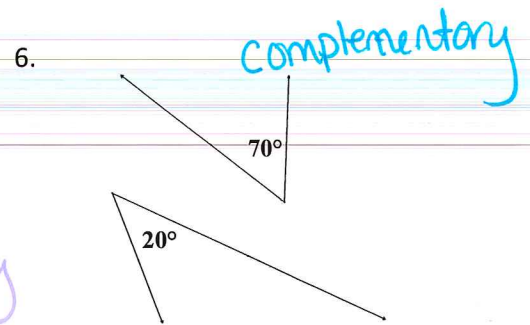
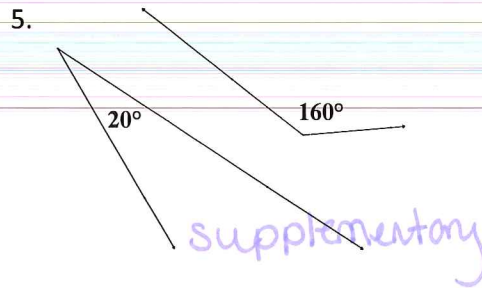
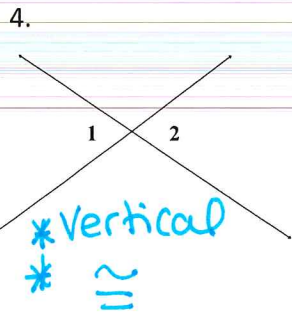
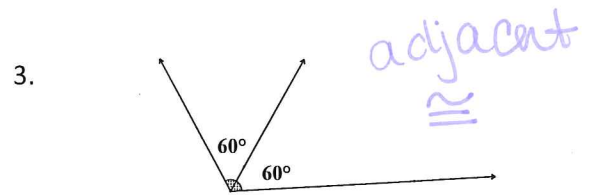
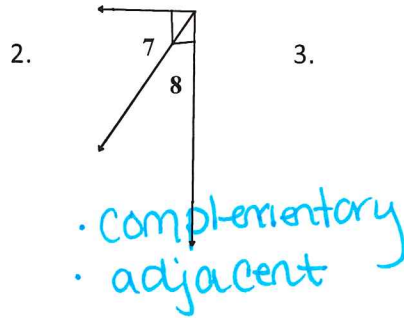
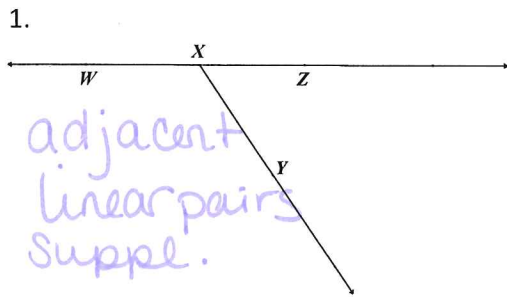


Key

Angles, Angles, Angles!!!! Reviewing Angle Relationships!

Classify all that apply, adjacent, vertical, linear pairs, ONE right angle, complementary, supplementary, and/or congruent.



7. $\angle 4$ and $\angle 6$ adjacent
complementary

8. $\angle 6$ and $\angle 1$
Vertical
 \cong

9. $\angle EGD$ and $\angle BGD$
adjacent, linear pairs
Supplementary

10. $\angle CGD$
ONE Right
angle!

11. $\angle CGD$ and $\angle FGA$
Vertical
 \cong
(suppl. only
because they
are both 90°)

11. $\angle FGE$ and $\angle CGB$
Vertical \angle s
 \cong