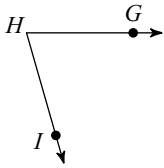


# Vocab Review

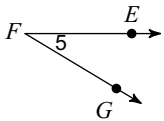
**Name the vertex and sides of each angle.**

1)



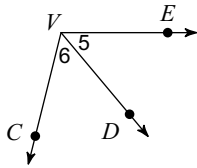
**Name each angle in four ways.**

2)



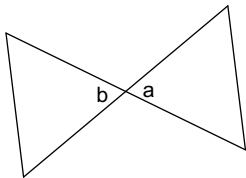
**Name all the angles that have V as a vertex.**

3)

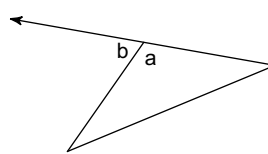


**Name the relationship: linear pair, or vertical.**

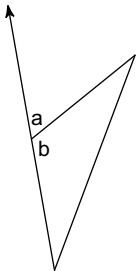
4)



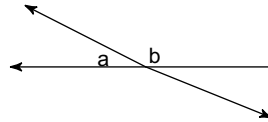
5)



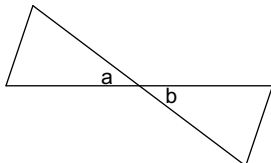
6)



7)



8)



9)

