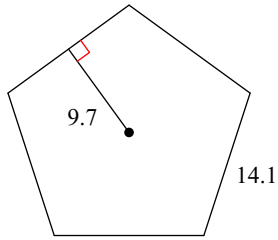


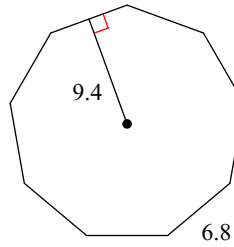
Area of Regular Polygons

Find the area of each regular polygon. Round your answer to the nearest tenth if necessary.

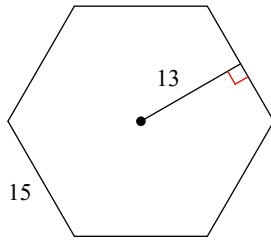
1)



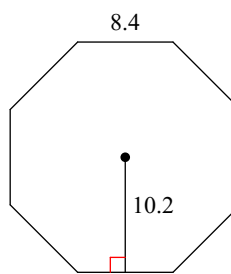
2)



3)

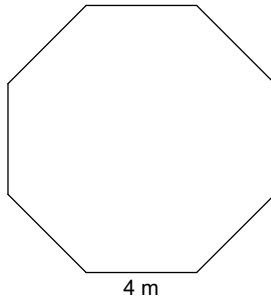


4)

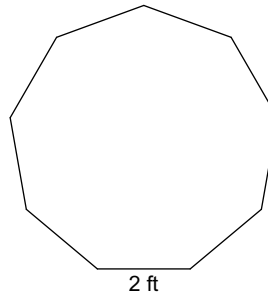


Find the area of each figure. Round your answer to the nearest tenth.

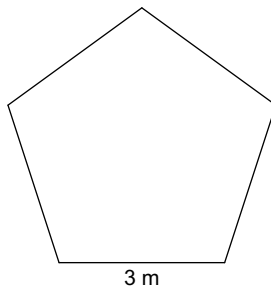
5)



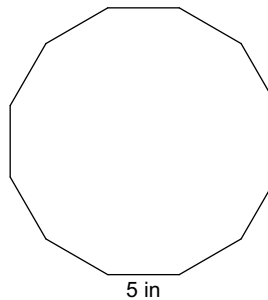
6)



7)



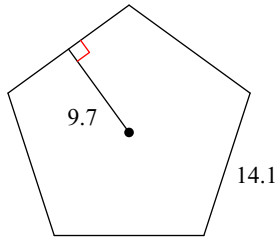
8)



Area of Regular Polygons

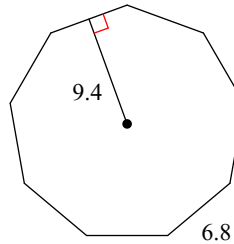
Find the area of each regular polygon. Round your answer to the nearest tenth if necessary.

1)



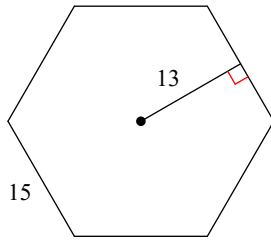
341.9

2)



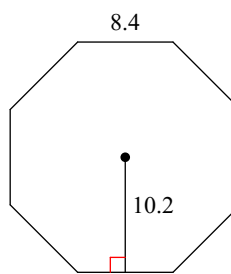
287.6

3)



585

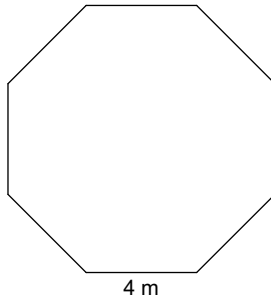
4)



342.7

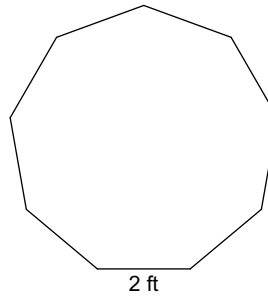
Find the area of each figure. Round your answer to the nearest tenth.

5)



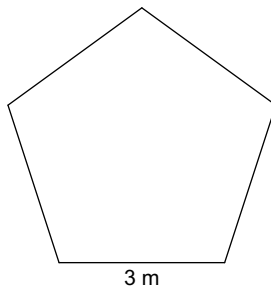
77.3 m²

6)



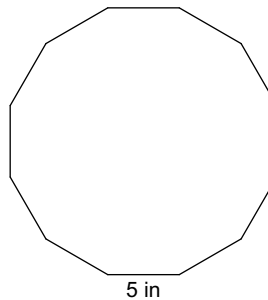
24.7 ft²

7)



15.5 m²

8)



279.9 in²