

Name \_\_\_\_\_

### Circle Definition Review

In your team, match the figures at the right with the terms at the left. Do not use your composition book until you have until you have exhausted all possibilities with your team.

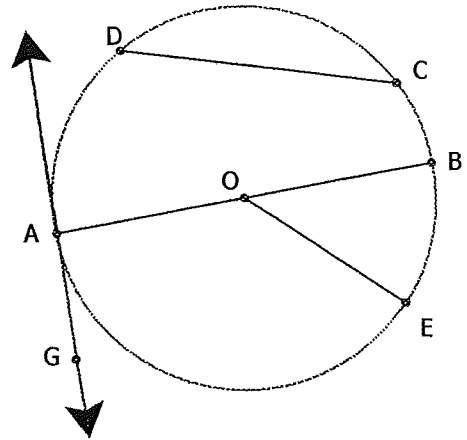
1. Congruent Circles \_\_\_\_\_
2. Concentric Circles \_\_\_\_\_
3. Radius \_\_\_\_\_
4. Chord \_\_\_\_\_
5. Diameter \_\_\_\_\_
6. Tangent \_\_\_\_\_
7. Minor Arc \_\_\_\_\_
8. Major Arc \_\_\_\_\_
9. Semicircle \_\_\_\_\_

A.  $\overline{DC}$

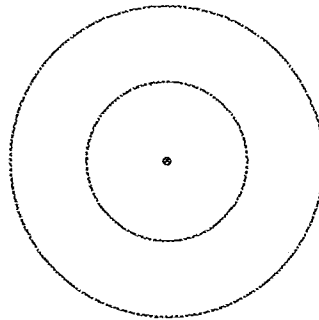
B.  $\overline{AG}$

C.  $\overline{OE}$

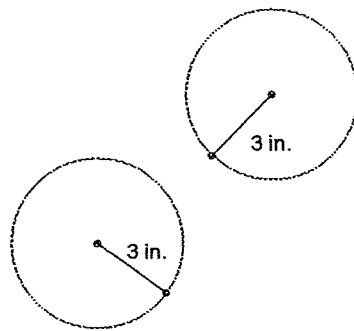
D.  $\overline{AB}$



E.



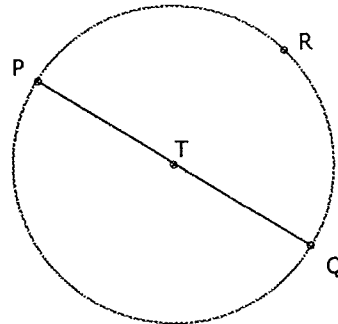
F.



G.  $\widehat{RQ}$

H.  $\widehat{PRQ}$

I.  $\widehat{PQR}$



Name Key

### Circle Definition Review

In your team, match the figures at the right with the terms at the left. Do not use your composition book until you have until you have exhausted all possibilities with your team.

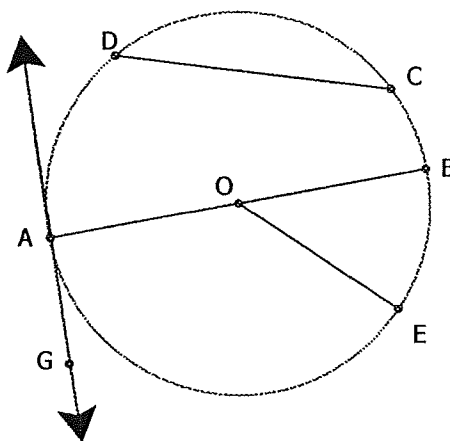
1. Congruent Circles F
2. Concentric Circles E
3. Radius C
4. Chord A
5. Diameter D
6. Tangent B
7. Minor Arc G
8. Major Arc ~~I~~ I
9. Semicircle H

A.  $\overline{DC}$

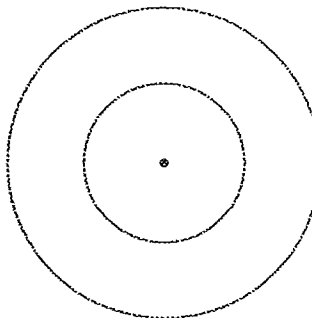
B.  $\overline{AG}$

C.  $\overline{OE}$

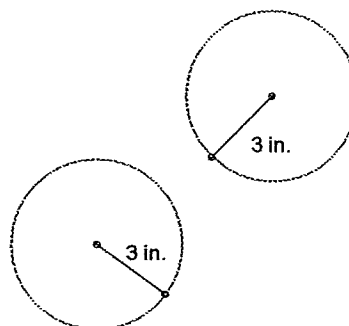
D.  $\overline{AB}$



E.



F.



G.  $\widehat{RQ}$

H.  $\widehat{PRQ}$

I.  $\widehat{PQR}$

