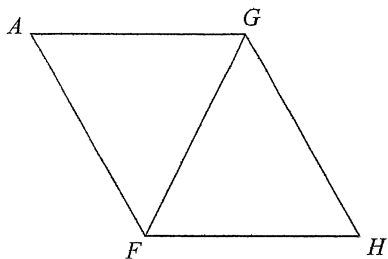


Congruent Triangle Practice

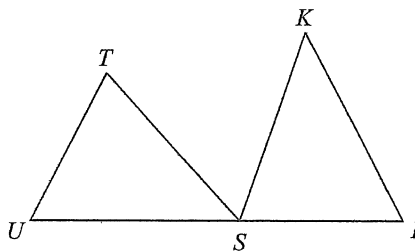
Complete each congruence statement by naming the corresponding angle or side.

1) $\triangle FGH \cong \triangle GFA$



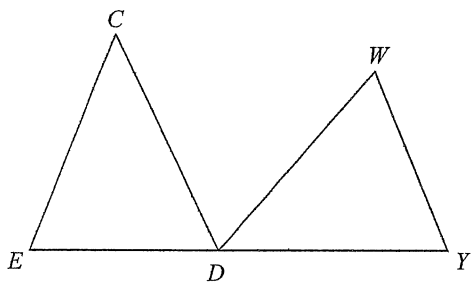
$\angle FGH \cong ?$

2) $\triangle UTS \cong \triangle ISK$



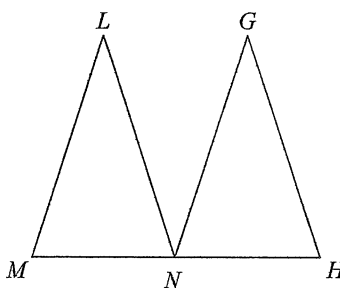
$\angle T \cong ?$

3) $\triangle ECD \cong \triangle YDW$



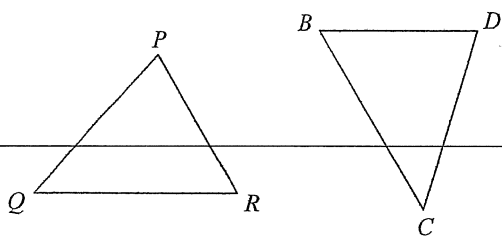
$\overline{CD} \cong ?$

4) $\triangle MLN \cong \triangle NGH$



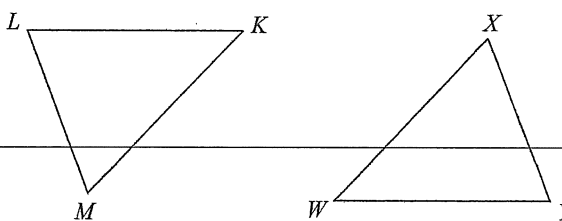
$\angle L \cong ?$

5) $\triangle RQP \cong \triangle BCD$



$\overline{PR} \cong ?$

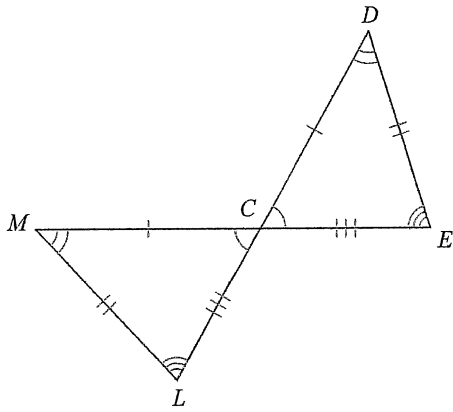
6) $\triangle KML \cong \triangle WXY$



$\angle M \cong ?$

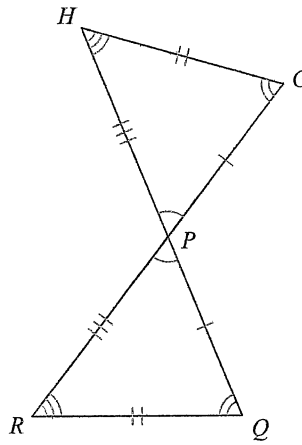
Write a statement that indicates that the triangles in each pair are congruent.

7)



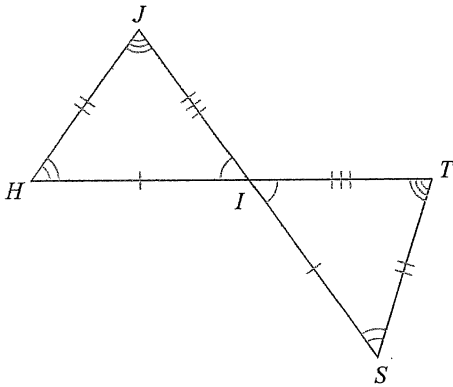
- A) $\triangle CED \cong \triangle MLC$
- B) $\triangle DCE \cong \triangle CLM$
- C) $\triangle CED \cong \triangle LCM$
- D) $\triangle CDE \cong \triangle CML$

8)



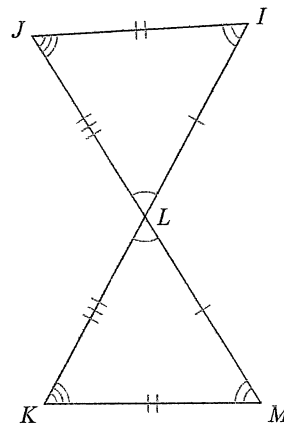
- A) $\triangle QPR \cong \triangle GHP$
- B) $\triangle RQP \cong \triangle HPG$
- C) $\triangle RPQ \cong \triangle HGP$
- D) $\triangle PQR \cong \triangle PGH$

9)



- A) $\triangle IHJ \cong \triangle STI$
- B) $\triangle IJH \cong \triangle TIS$
- C) $\triangle IHJ \cong \triangle IST$
- D) $\triangle HJI \cong \triangle TSI$

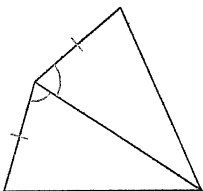
10)



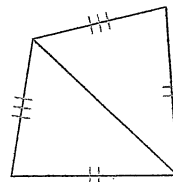
- A) $\triangle MLK \cong \triangle JIL$
- B) $\triangle MLK \cong \triangle LJI$
- C) $\triangle LMK \cong \triangle JLI$
- D) $\triangle LMK \cong \triangle LIJ$

State if the two triangles are congruent. If they are, state how you know.

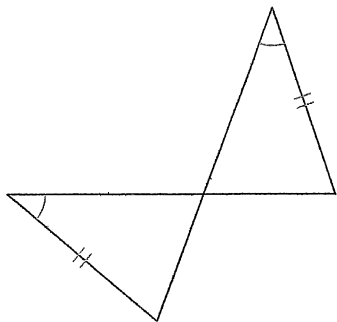
11)




12)



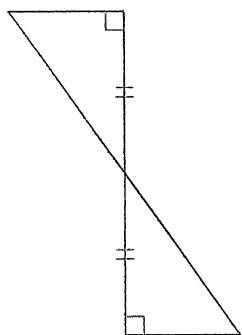
13)



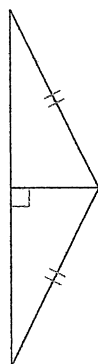
14)



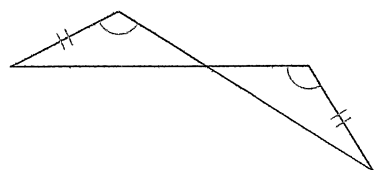
15)



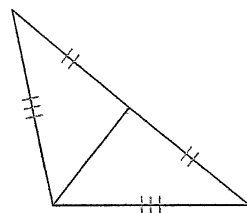
16)



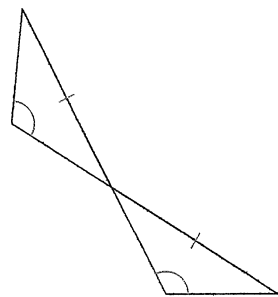
17)



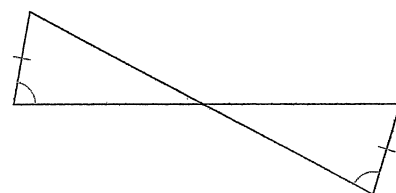
18)



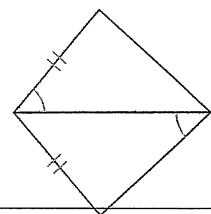
19)



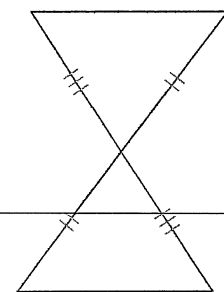
20)



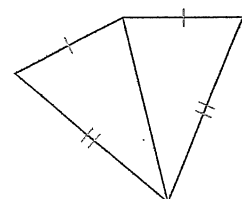
21)



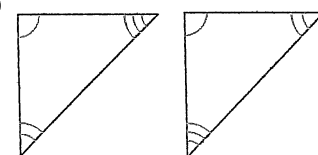
22)



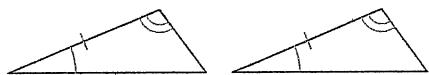
23)



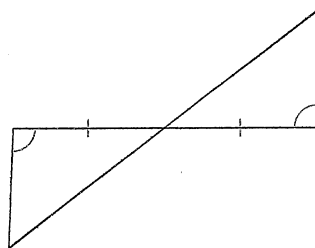
24)



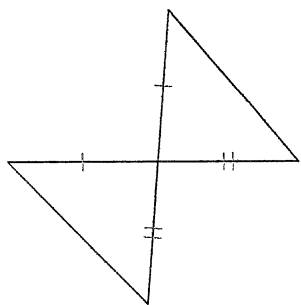
25)



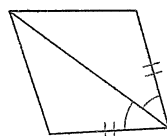
26)



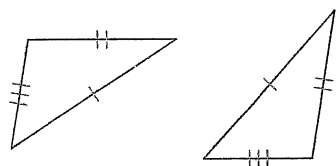
27)



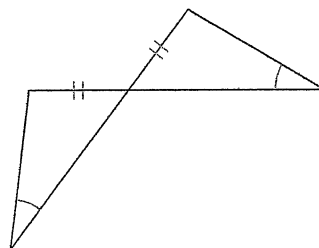
28)



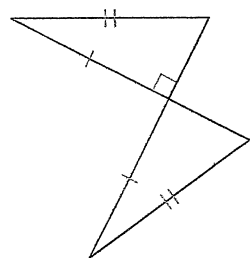
29)



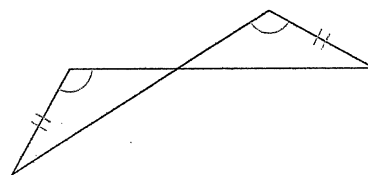
30)



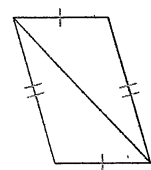
31)



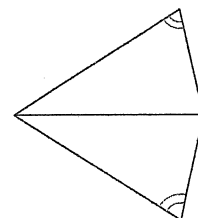
32)



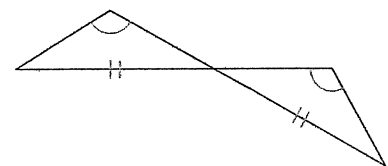
33)



34)



35)



36)

