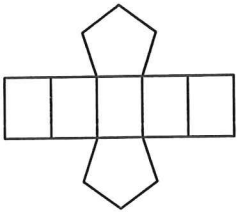


Naming Nets

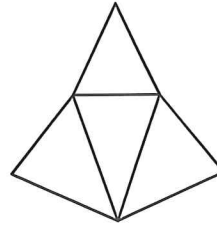
Identify each solid given its net. *color in the base(s).*

1)



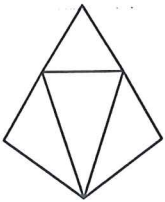
- A) triangular prism
- B) pentagonal prism
- C) cone
- D) hexagonal prism

2)



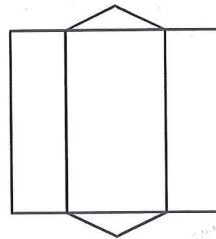
- A) rectangular pyramid
- B) triangular prism
- C) triangular pyramid
- D) square pyramid

3)



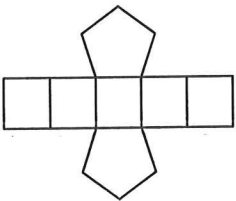
- A) triangular pyramid
- B) hexagonal prism
- C) rectangular pyramid
- D) triangular prism

4)



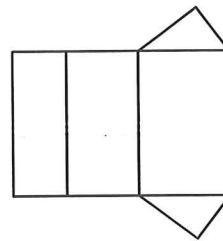
- A) square prism
- B) pentagonal pyramid
- C) triangular prism
- D) cylinder

5)



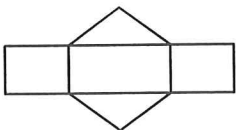
- A) pentagonal prism
- B) cone
- C) rectangular pyramid
- D) square prism

6)



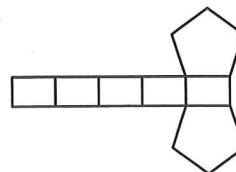
- A) pentagonal pyramid
- B) cone
- C) triangular prism
- D) hexagonal pyramid

7)



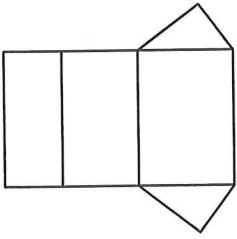
- A) square pyramid
- B) rectangular pyramid
- C) pentagonal pyramid
- D) triangular prism

8)



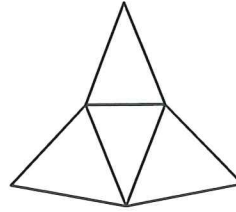
- A) hexagonal prism
- B) pentagonal prism
- C) pentagonal pyramid
- D) square pyramid

9)




- A) triangular prism
- B) cone
- C) triangular pyramid
- D) hexagonal prism

10)



- A) triangular pyramid
- B) square prism
- C) hexagonal pyramid
- D) pentagonal prism

11)



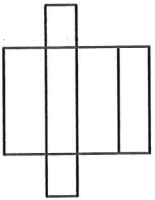
- A) cylinder
- B) pentagonal pyramid
- C) square pyramid
- D) cone

12)



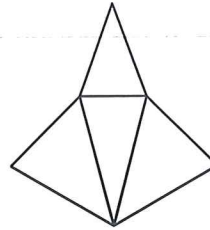
- A) cylinder
- B) hexagonal pyramid
- C) square pyramid
- D) triangular pyramid

13)



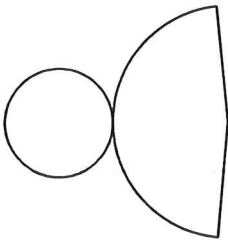
- A) pentagonal prism
- B) square pyramid
- C) cone
- D) rectangular prism

14)



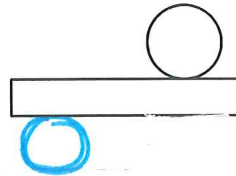
- A) rectangular prism
- B) triangular pyramid
- C) square pyramid
- D) hexagonal prism

15)



- A) cone
- B) pentagonal pyramid
- C) triangular pyramid
- D) pentagonal prism

16)



- A) triangular prism
- B) hexagonal pyramid
- C) cylinder
- D) rectangular prism

Answers to Naming Nets (ID: 1)

1) B
5) A
9) A
13) D

2) C
6) C
10) A
14) B

3) A
7) D
11) B
15) A

4) C
8) B
12) D
16) C