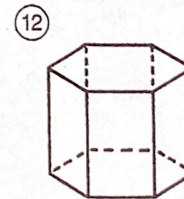
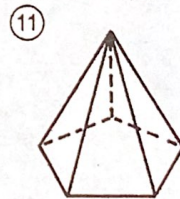
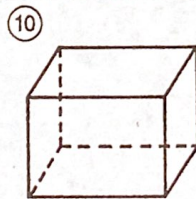
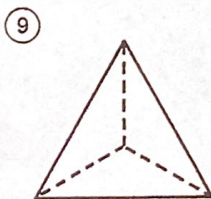
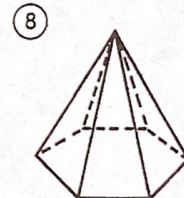
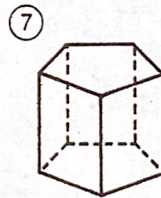
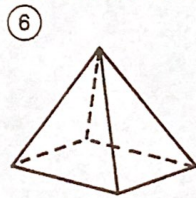
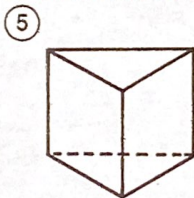
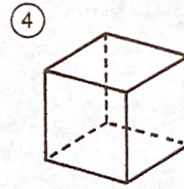
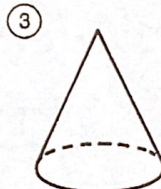
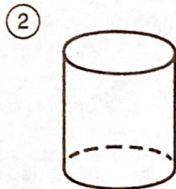
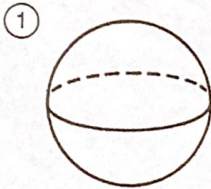


What Did the Taxi Driver Say About His Daughter?

Write the name that best describes each space figure. Then find your answer in the answer column. Write the letter of the answer in the box containing the number of the exercise.

6	4	9		2	11	5	7		10	1	12	8	3
---	---	---	--	---	----	---	---	--	----	---	----	---	---



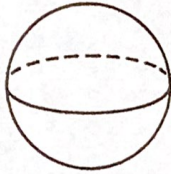
- ⒰ triangular pyramid
- ⒱ hexagonal prism
- ⒲ cone
- ⒳ triangular prism
- ⒴ sphere
- ⒵ rectangular prism
- Ⓐ pentagonal prism
- Ⓑ cube
- Ⓒ pentagonal pyramid
- Ⓓ cylinder
- Ⓔ hexagonal pyramid
- Ⓕ rectangular pyramid

What Did the Taxi Driver Say About His Daughter?

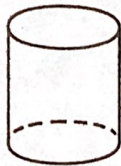
Write the name that best describes each space figure. Then find your answer in the answer column. Write the letter of the answer in the box containing the number of the exercise.

6	4	9	2	11	5	7	10	1	12	8	3
Y	O	U	A	U	T	O	M	E	T	E	R

①



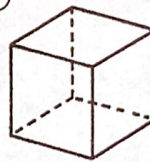
②



③



④



Ⓐ triangular pyramid

Ⓑ hexagonal prism

Ⓒ cone

Ⓓ triangular prism

Ⓔ sphere

Ⓜ rectangular prism

Ⓞ pentagonal prism

Ⓟ cube

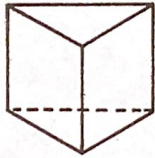
Ⓤ pentagonal pyramid

Ⓟ cylinder

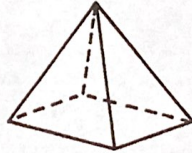
Ⓡ hexagonal pyramid

Ⓢ rectangular pyramid

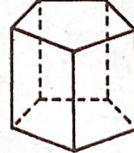
⑤



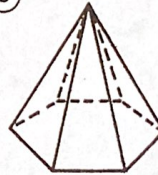
⑥



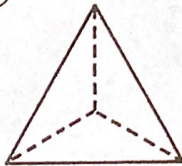
⑦



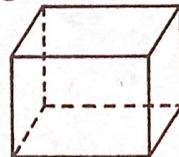
⑧



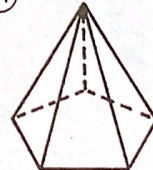
⑨



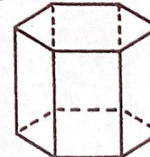
⑩



⑪



⑫

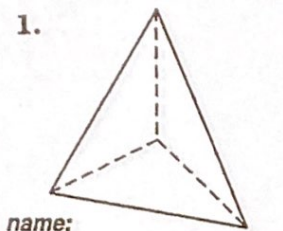


Who Turns Out the Lights on Halloween?

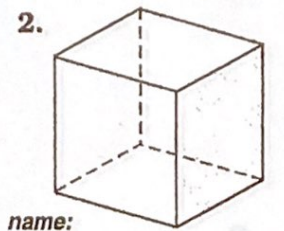


Write the name that best describes the space figure. Then fill in the other blanks as indicated. Find the name in the answer column. Write the letter next to it in the box at the bottom of the page that contains the other required information.

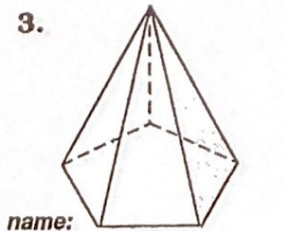
For Figures 1-9, write the name and the number of faces (F), vertices (V), and edges (E).



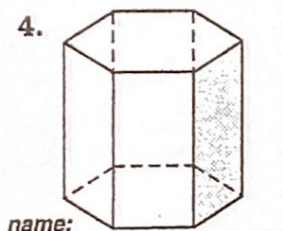
F: _____ V: _____ E: _____



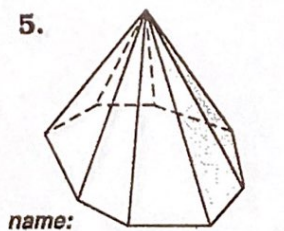
F: _____ V: _____ E: _____



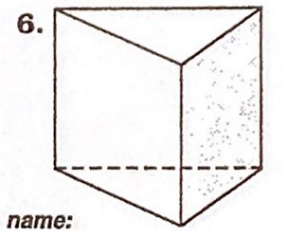
F: _____ V: _____ E: _____



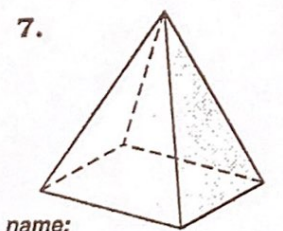
F: _____ V: _____ E: _____



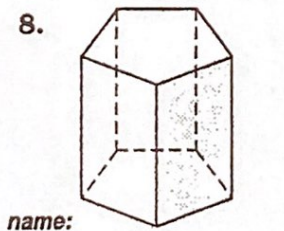
F: _____ V: _____ E: _____



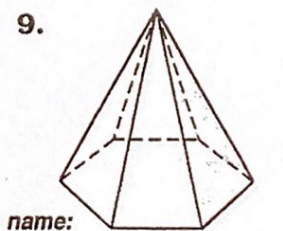
F: _____ V: _____ E: _____



F: _____ V: _____ E: _____

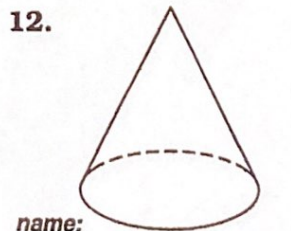
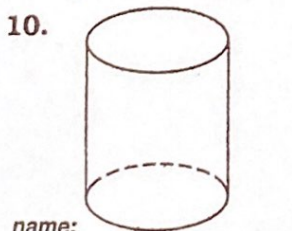


F: _____ V: _____ E: _____



F: _____ V: _____ E: _____

For Figures 10-12, write the name and the number of bases (B).



- names:
- I** triangular prism
 - T** rectangular prism
 - A** pentagonal prism
 - H** hexagonal prism
 - N** octagonal prism
 - L** cylinder
 - T** sphere
 - I** triangular pyramid
 - H** rectangular pyramid
 - S** pentagonal pyramid
 - C** hexagonal pyramid
 - G** octagonal pyramid
 - W** cone

7, 10, 15	7, 9, 14	2	4, 4, 6	9, 9, 16	5, 5, 8	0	6, 6, 10	3	1	5, 6, 9	6, 8, 12	7, 7, 12	8, 12, 18
-----------	----------	---	---------	----------	---------	---	----------	---	---	---------	----------	----------	-----------

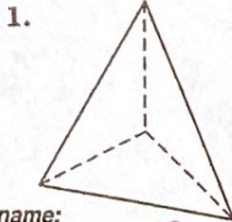
Who Turns Out the Lights on Halloween?

Key

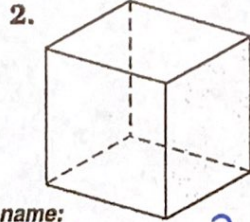


Write the name that best describes the space figure. Then fill in the other blanks as indicated. Find the name in the answer column. Write the letter next to it in the box at the bottom of the page that contains the other required information.

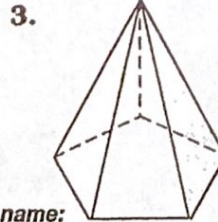
For Figures 1-9, write the name and the number of faces (F), vertices (V), and edges (E).



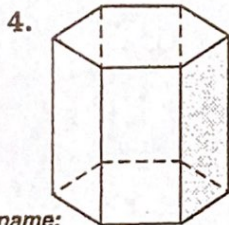
name: Triangular Pyramid
F: 4 V: 4 E: 6



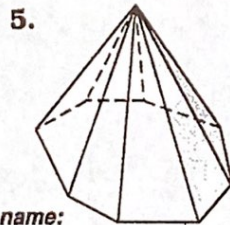
name: Rectangular Prism
F: 6 V: 8 E: 12



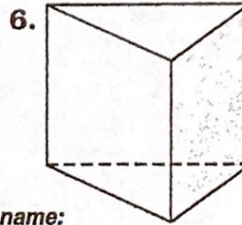
name: pent. pyramid
F: 6 V: 6 E: 10



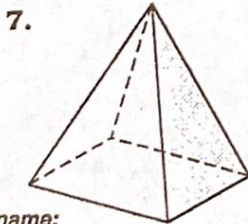
name: hex prism
F: 8 V: 12 E: 18



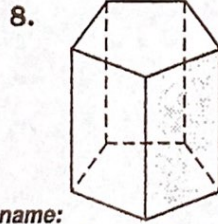
name: Oct. Pyramid
F: 9 V: 9 E: 16



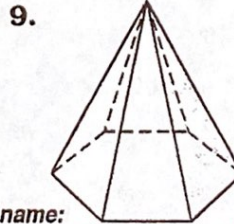
name: tri. prism
F: 5 V: 6 E: 9



name: Rect. Pyramid
F: 5 V: 5 E: 8

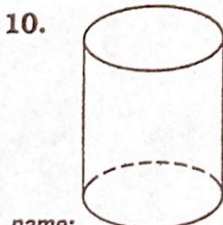


name: pent. prism
F: 7 V: 10 E: 15




name: hex. pyramid
F: 7 V: 7 E: 12

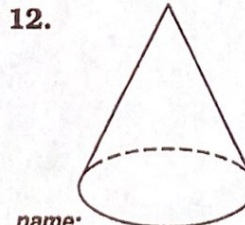
For Figures 10-12, write the name and the number of bases (B).



name: Cylinder B: 2



name: sphere B: 0



name: cone B: 1

- names:
- I triangular prism
 - T rectangular prism
 - A pentagonal prism
 - H hexagonal prism
 - N octagonal prism
 - L cylinder
 - T sphere
 - I triangular pyramid
 - H rectangular pyramid
 - S pentagonal pyramid
 - C hexagonal pyramid
 - G octagonal pyramid
 - W cone

7, 10, 15	7, 9, 14	2	4, 4, 6	9, 9, 16	5, 5, 8	0	6, 6, 10	3	1	5, 6, 9	6, 8, 12	7, 7, 12	8, 12, 18
A		I	I	G	N	+	S		W	I	+	C	H