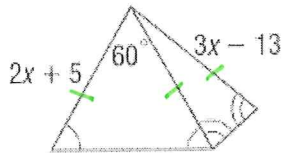


Isosceles and Equilateral Triangles- Homework

Directions: Show all work to find x. Circle your final answer.

1.

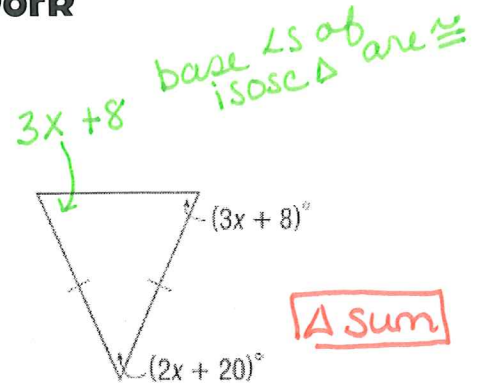


Base \angle s \cong then it is an isosc Δ .

$$2x + 5 = 3x - 13$$

$$\boxed{x = 18}$$

2.



Δ Sum

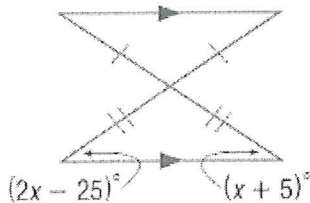
$$3x + 8 + 3x + 8 + 2x + 20 = 180$$

$$8x + 36 = 180$$

$$8x = 144$$

$$\boxed{x = 18}$$

3.

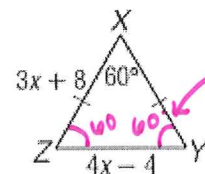


base \angle s of isosc Δ s are \cong

$$2x - 25 = x + 5$$

$$\boxed{30 = x}$$

4.



$180 - 60 = 120 \div 2$
b/c base \angle s of isosc $\Delta \cong$
so $\angle Z = \angle Y = 60^\circ$
 $\therefore \Delta XYZ$ is equilateral.

$$XZ = ZY$$

$$3x + 8 = 4x - 4$$

$$\boxed{12 = x}$$

5.

CHALLENGE In the figure, ΔABC is isosceles, ΔDCE is equilateral, and ΔFCG is isosceles. Find the measures of the five numbered angles at vertex C.

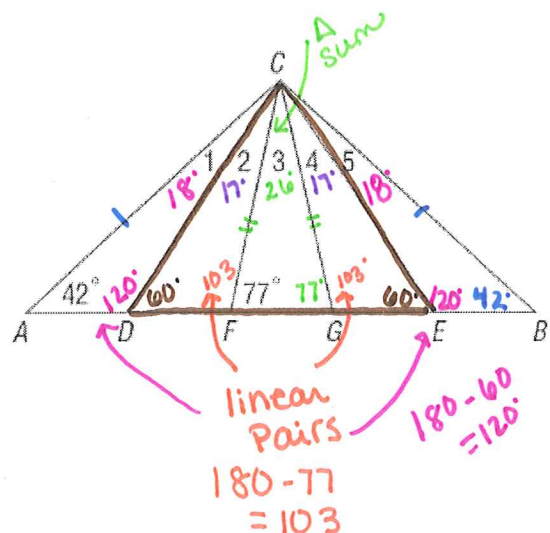
$$m\angle 1 = \underline{18^\circ}$$

$$m\angle 2 = \underline{17^\circ}$$

$$m\angle 3 = \underline{26^\circ}$$

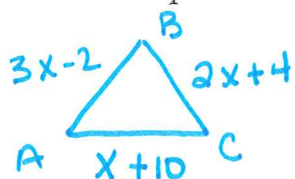
$$m\angle 4 = \underline{17^\circ}$$

$$m\angle 5 = \underline{18^\circ}$$



Reading the question: Draw your figure before you solve. Find x and the measure of each side of the triangle.

6. $\triangle ABC$ is equilateral with $AB = 3x - 2$, $BC = 2x + 4$, and $CA = x + 10$.



$$BC = AC$$

$$2x + 4 = x + 10$$

$$x = 6$$

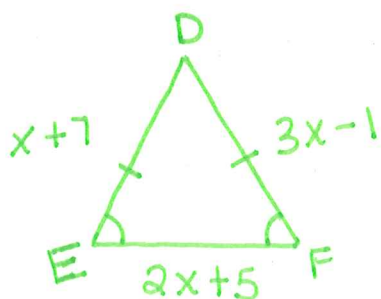
def of eq. \triangle

$$AB = 16$$

$$BC = 16$$

$$AC = 16$$

7. $\triangle DEF$ is isosceles, $\angle D$ is the vertex angle, $DE = x + 7$, $DF = 3x - 1$, and $EF = 2x + 5$.



$$ED = DF \text{ def of isos. } \triangle$$

$$x + 7 = 3x - 1$$

$$8 = 2x$$

$$4 = x$$

$$DE = 11$$

$$DF = 11$$

$$EF = 13$$

Find the measures of the sides of $\triangle RST$ and classify each triangle by its sides.

8. $R(0, 2)$, $S(2, 5)$, $T(4, 2)$

$$SR^2 = 3^2 + 2^2$$

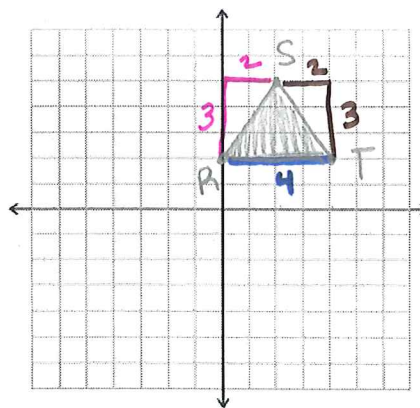
$$SR = \sqrt{13}$$

$$ST^2 = 2^2 + 3^2$$

$$ST = \sqrt{13}$$

$$RT = 4$$

$SR \cong ST$ so $\triangle RST$ is isosceles by def.



9. $R(1, 3)$, $S(4, 7)$, $T(5, 4)$

$$SR^2 = 3^2 + 4^2$$

$$SR = \sqrt{25}$$

$$SR = 5$$

$$RT^2 = 1^2 + 4^2$$

$$RT = \sqrt{17}$$

$$ST^2 = 1^2 + 3^2$$

$$ST = \sqrt{10}$$

None are \cong \therefore by def. $\triangle RST$ is scalene

