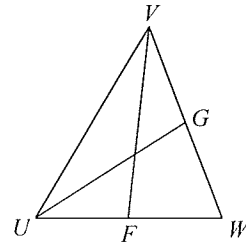
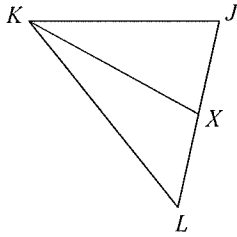


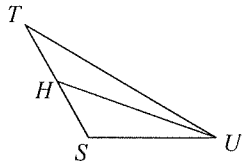
Median HW

Each figure shows a triangle with one or more of its medians.

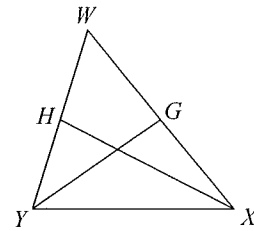
- 1) Find XJ if $LJ = 4$ *Show ALL work for credit!* 2) Find FU if $FW = 1.25$



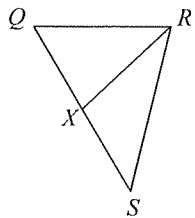
- 3) Find x if $TS = x + 6$ and $HS = x + 1$



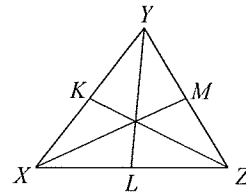
- 4) Find x if $WY = 2x + 6$ and $HY = 2x - 3$



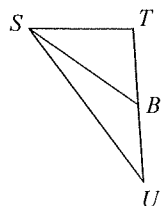
- 5) Find x if $XS = 5x$ and $XQ = 4x + 1$



- 6) Find x if $XZ = x + 5$ and $LZ = 2x - 11$



- 7) Find BT if $BT = x + 1$ and $BU = 2x - 1$



Medians-ID.notebook

Name the median in Triangle ABC + highlight

