

Name: Key 2021

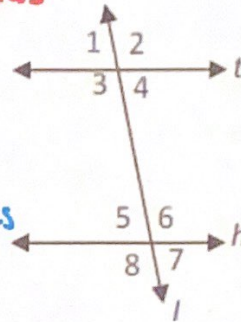
when given: \parallel lines \rightarrow use \parallel lines form.

Parallel Proofs HW

when you want to \rightarrow use vertical form \parallel lines
 Prove \parallel lines

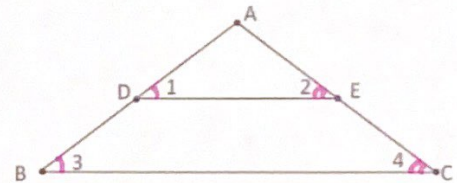
1. Given: $t \parallel h$
 Prove: $\angle 3$ and $\angle 7$ are supplementary.

Statements	Reasons
1. $t \parallel h$	1. given
2. $\angle 5 \cong \angle 7$	2. Vertical \angle s are \cong
3. $\angle 3 + \angle 5 = 180$	3. \parallel lines form suppl. con. int \angle s
4. $\angle 3 + \angle 7 = 180$	4. \parallel lines form <u>Substitution</u>
5. $\angle 3$ and $\angle 7$ are Suppl.	5. def of suppl.



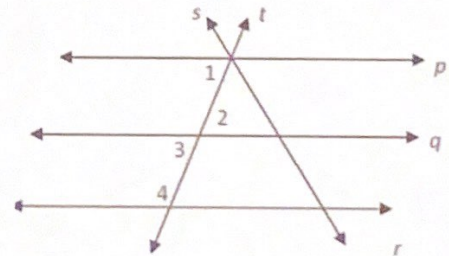
2. Given: $DE \parallel BC$ and $\angle 1 \cong \angle 2$
 Prove: $\angle 3 \cong \angle 4$

Statements	Reasons
1. $DE \parallel BC$ $\angle 1 \cong \angle 2$	1. given
2. $\angle 1 \cong \angle 3$, and $\angle 4 \cong \angle 2$	2. \parallel lines form \cong corr. \angle s
3. $\angle 3 \cong \angle 4$	3. <u>Substitution</u>

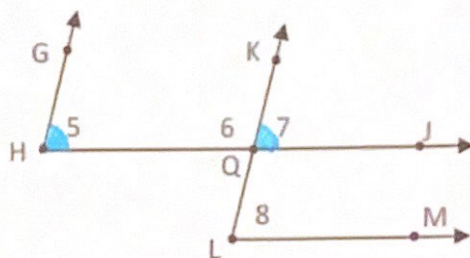


3. Given: $p \parallel q \parallel r$
 Prove: $\angle 2$ and $\angle 4$ are supplementary

Statements	Reasons
1. $p \parallel q \parallel r$	1. Given
2. $\angle 3 + \angle 4 = 180$	2. \parallel lines form Suppl. consecutive int \angle s.
3. $\angle 3 \cong \angle 2$	3. Vertical \angle s are \cong
4. $\angle 2 + \angle 4 = 180$	4. <u>Substitution</u>
5. $\angle 2$ and $\angle 4$ are Suppl.	5. def of suppl.



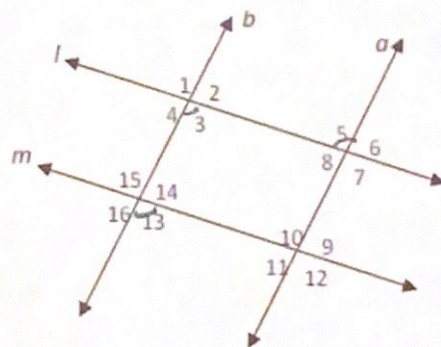
4. Given: $HJ \parallel LM$, $HG \parallel LK$
 Prove: $\angle 5 \cong \angle 8$



Statements	Reasons
1. $HJ \parallel LM$, $HG \parallel LK$	1. Given
2. $\angle 5 \cong \angle 7$	2. \parallel lines form \cong corr. \angle s
3. $\angle 7 \cong \angle 8$	3. \parallel lines form \cong corr. \angle s
4. $\angle 5 \cong \angle 8$	4. Substitution

These could be together or 2 steps. You must follow what the proof gives you!

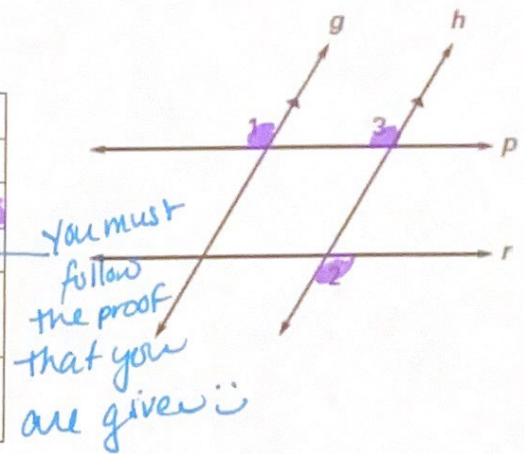
5. Given: $a \parallel b$, $l \parallel m$
 Prove: $\angle 5 \cong \angle 13$



Statements	Reasons
1. $a \parallel b$, $l \parallel m$	1. Given
2. $\angle 5 \cong \angle 3$	2. \parallel lines form \cong alt int angles.
3. $\angle 3 \cong \angle 13$	3. \parallel lines form \cong corr. \angle s
4. $\angle 5 \cong \angle 13$	4. Substitution

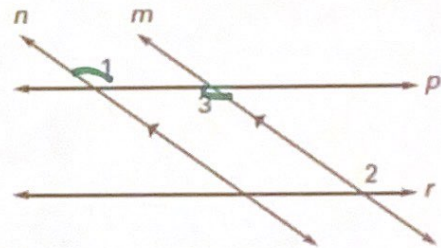
6. Given: $g \parallel h$, $\angle 1 \cong \angle 2$
 Prove: $p \parallel r$

Statements	Reasons
1. $g \parallel h$	1. given
2. $\angle 1 \cong \angle 3$	2. // lines form \cong corr. \angle s
3. $\angle 1 \cong \angle 2$	3. Given
4. $\angle 3 \cong \angle 2$ Not // lines form	4. Substitution
5. $p \parallel r$	5. \cong alt ext. \angle s form // lines



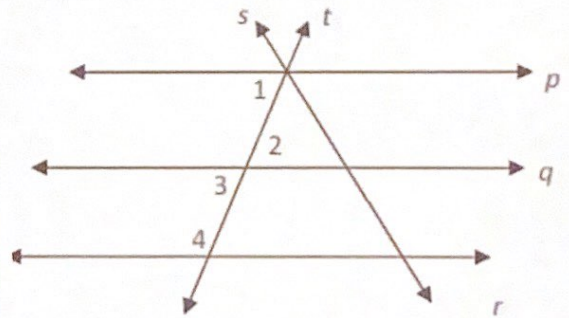
7. Given: $n \parallel m$ and $\angle 1 \cong \angle 2$
 Prove: $p \parallel r$

Statements	Reasons
1. $n \parallel m$	1. Given
2. $\angle 1 \cong \angle 3$	2. // lines form \cong alt. int \angle s
3. $\angle 1 \cong \angle 2$	3. Given
4. $\angle 3 \cong \angle 2$	4. Substitution
5. $p \parallel r$	5. \cong alt. INT \angle s form // lines



8. Given: $q \parallel r$, $\angle 1$ and $\angle 4$ are supplementary
 Prove: $p \parallel q$

Statements	Reasons
1. $q \parallel r$ $\angle 1$ and $\angle 4$ are Suppl.	1. Given
2. $\angle 1 + \angle 4 = 180$	2. def of suppl.
3. $\angle 3 + \angle 4 = 180$	3. // lines form suppl. consecutive int \angle s.
4. $\angle 1 + \angle 4 = \angle 3 + \angle 4$ - $\angle 4$ $+$	4. Substitution
5. $\angle 1 \cong \angle 3$	5. Subtraction
6. $p \parallel q$	6. \cong corresponding \angle s form // lines.



9. Given: $\angle 2$ and $\angle 8$ are supplementary
 Prove: $m \parallel n$

Statements	Reasons
1. $\angle 2$ and $\angle 8$ are suppl.	1. Given
2. $\angle 2 + \angle 8 = 180$	2. def of suppl.
3. $\angle 2 + \angle 4 = 180$	3. linear pairs are suppl.
4. $\angle 2 + \angle 8 = \angle 2 + \angle 4$	4. Substitution
5. $\angle 8 \cong \angle 4$	5. subtraction
6. $m \parallel n$	6. \cong corr. \angle s form \parallel lines

