

Name: Key

Hour: _____

Homework: Parallels Cut by a Transversal

Directions: Use the figure to complete the following:

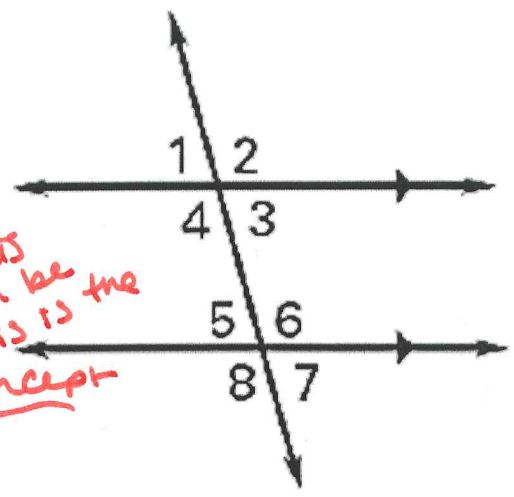
1. Highlight the transversal
2. Name the parallel lines n and k

Directions: Use the figure to name the relationship between the two angles.

You must use only the following relationships:

- Corresponding angles are congruent
- Alternate interior angles are congruent
- Alternate exterior angles are congruent
- Consecutive interior angles are supplementary
- Linear pairs are supplementary
- Vertical angles are congruent

If kids don't have this NO points can be earned. This is the new concept



3. Angles 5 and 3

alt. int \angle s are \cong

4. Angles 1 and 7

alt. ext. \angle s are \cong

5. Angles 8 and 4

Corresponding \angle s are \cong

6. Angles 6 and 3

consecutive int \angle s are suppl.

Directions: Use the figure to name the relationship between the two angles assuming the two lines are parallel and find the measure of the angles.

7. If $m\angle 2 = 113^\circ$, what is $m\angle 6$?

$m\angle 6 = 113^\circ$

Because: *corr. \angle s are \cong*

8. If $m\angle 4 = 100^\circ$, what is $m\angle 6$?

$m\angle 6 = 100^\circ$

Because: *alt. int \angle s are \cong*

9. If $m\angle 1 = 84^\circ$, what is $m\angle 3$?

$m\angle 3 = 84^\circ$

Because: *vertical \angle s are \cong*

10. If $m\angle 7 = 75^\circ$, what is $m\angle 1$?

$m\angle 1 = 75^\circ$

Because: *alt. ext. \angle s are \cong*

11. If $m\angle 3 = 81^\circ$, what is $m\angle 6$?

$m\angle 6 = 99^\circ$

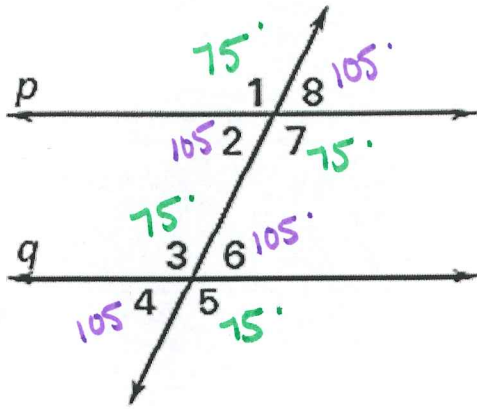
Because: *cons. int \angle s are suppl.*

12. If $m\angle 6 = 111^\circ$, what is $m\angle 3$?

$m\angle 3 = 69^\circ$

Because: *con. int \angle s are suppl.*

13. If $p \parallel q$ and $m\angle 1 = 75^\circ$, find the measures of all the angles formed by the parallel lines cut by the transversal.



$$m\angle 1 = 75^\circ \quad m\angle 2 = 105^\circ$$

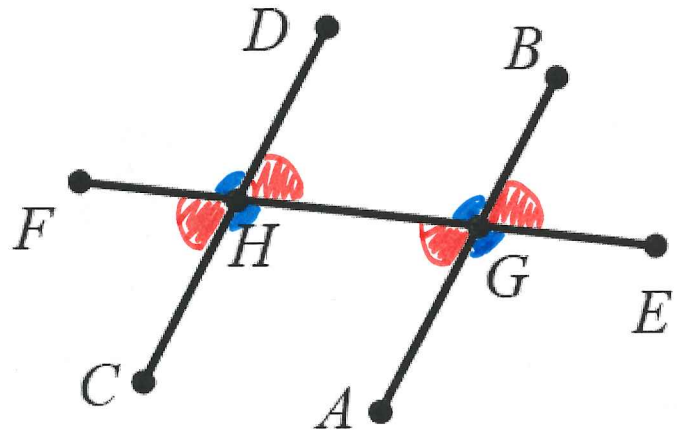
$$m\angle 3 = 75^\circ \quad m\angle 4 = 105^\circ$$

$$m\angle 5 = 75^\circ \quad m\angle 6 = 105^\circ$$

$$m\angle 7 = 75^\circ \quad m\angle 8 = 105^\circ$$

Directions:

If DC and BA are parallel, state if the angles are congruent or supplementary and why.



14. $\angle DHG$ and $\angle HGA \cong$
alt int \angle s are \cong

15. $\angle FHC$ and $\angle DHG \cong$
Vertical \angle s are \cong

16. $\angle BGE$ and $\angle FHC \cong$
alt. Ext. \angle s are \cong

17. $\angle EGA$ and $\angle GHC \cong$
Corresponding \angle s are \cong

18. $\angle AGH$ and $\angle EGA$ Suppl.
linear pairs are suppl.