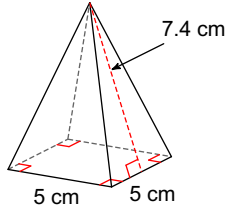


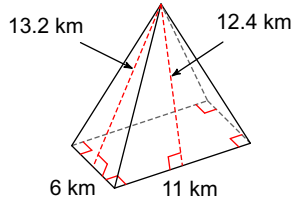
SA and Volume of Pyramids Examples

Find the surface area of each figure. Round your answers to the nearest hundredth, if necessary.

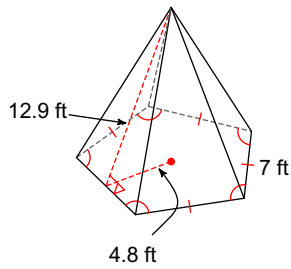
1)



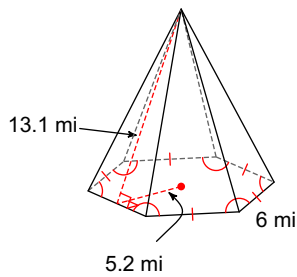
2)



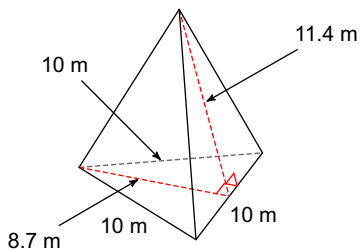
3)



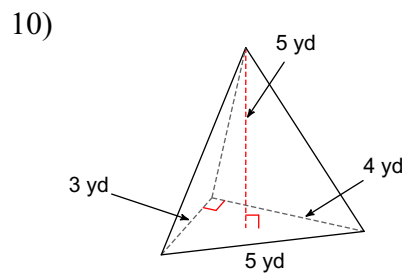
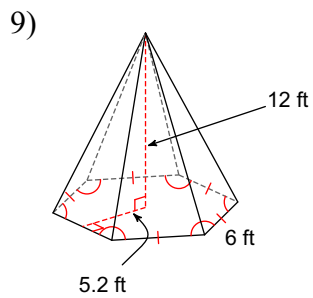
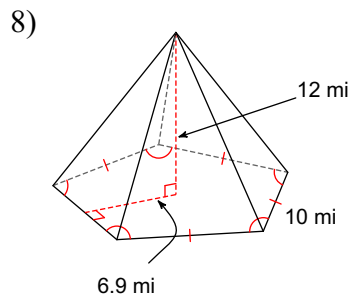
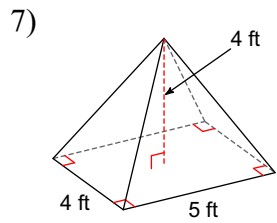
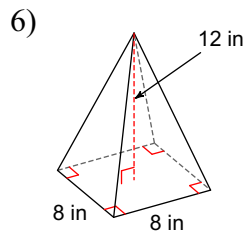
4)



5)



Find the volume of each figure. Round your answers to the nearest hundredth, if necessary.



Answers to SA and Volume of Pyramids Examples (ID: 1)

1) 99 cm^2

5) 214.5 m^2

9) 374.4 ft^3

2) 281.6 km^2

6) 256 in^3

10) 10 yd^3

3) 309.75 ft^2

7) 26.67 ft^3

4) 329.4 mi^2

8) 690 mi^3