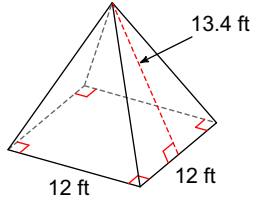


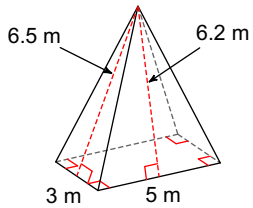
SA and Volume of Pyramids Practice

Find the surface area of each figure. Round your answers to the nearest hundredth, if necessary.

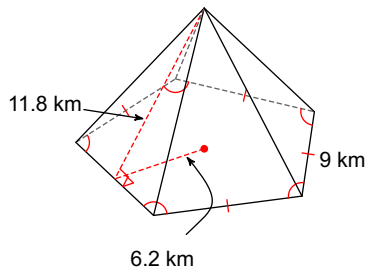
1)



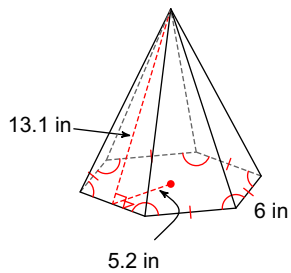
2)



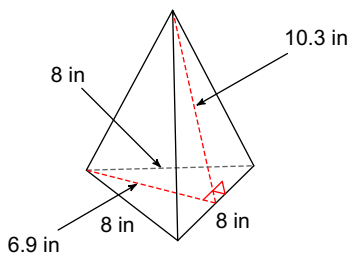
3)



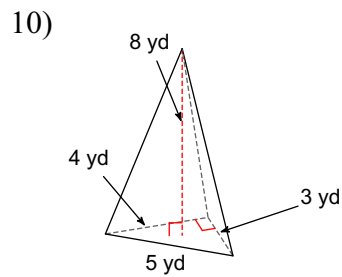
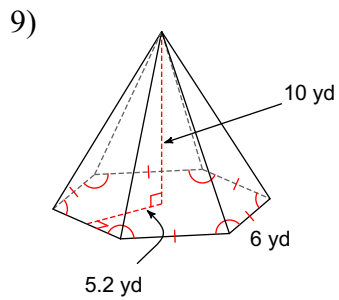
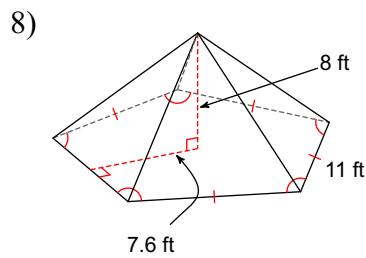
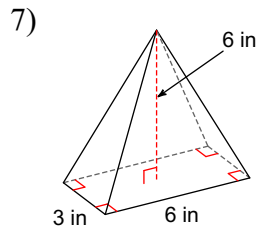
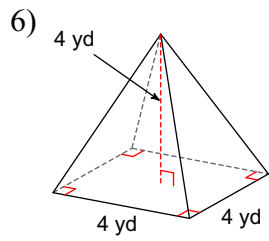
4)



5)



Find the volume of each figure. Round your answers to the nearest hundredth, if necessary.



Answers to SA and Volume of Pyramids Practice (ID: 1)

1) 465.6 ft^2
5) 151.2 in^2
9) 312 yd^3

2) 65.5 m^2
6) 21.33 yd^3
10) 16 yd^3

3) 405 km^2
7) 36 in^3

4) 329.4 in^2
8) 557.33 ft^3