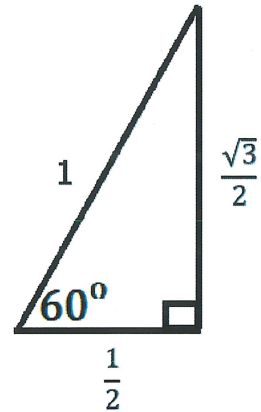
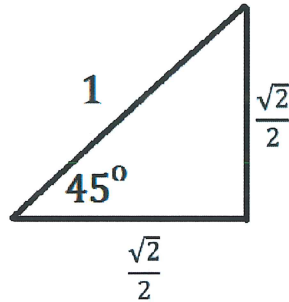
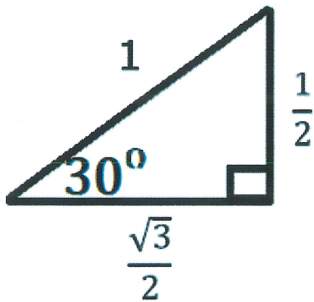


Trig Functions of General Angles Notes (Degrees)

To find the EXACT trigonometric values Notes

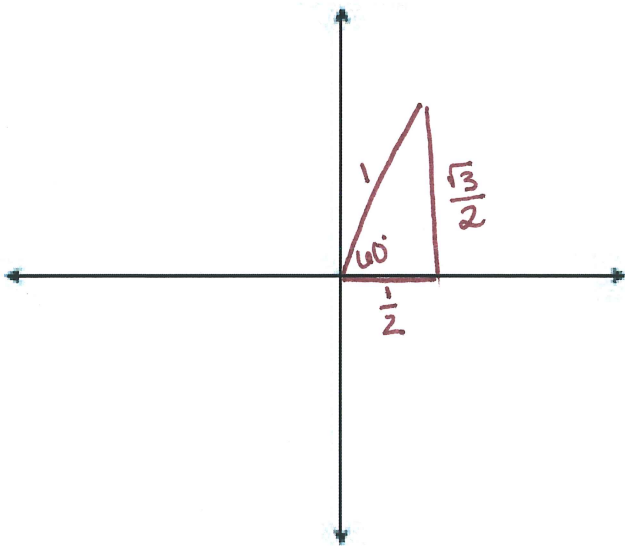
- 1.) Sketch the angle
- 2.) Label the reference angle
- 3.) Draw a triangle to the x-axis and label sides
- 4.) Find the trig values

Recall that the radius is one because we are working with the unit circle.



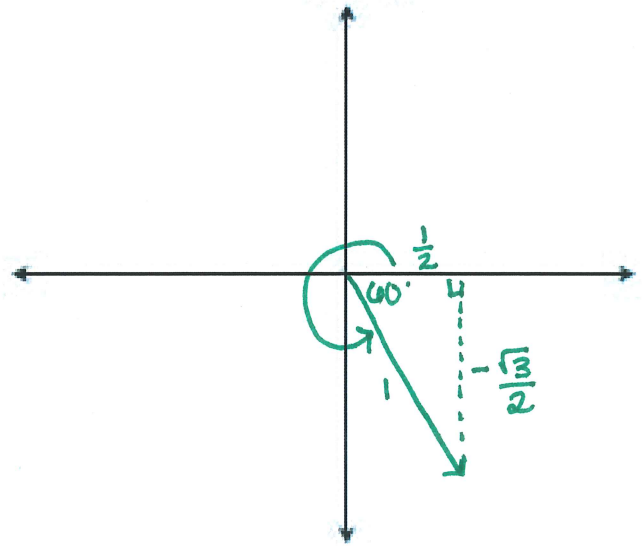
1. Find the exact value of $\sin 60^\circ$.

2. Find the exact value of $\cos 300^\circ$.



$$\sin 60^\circ = \frac{\sqrt{3}}{2}$$

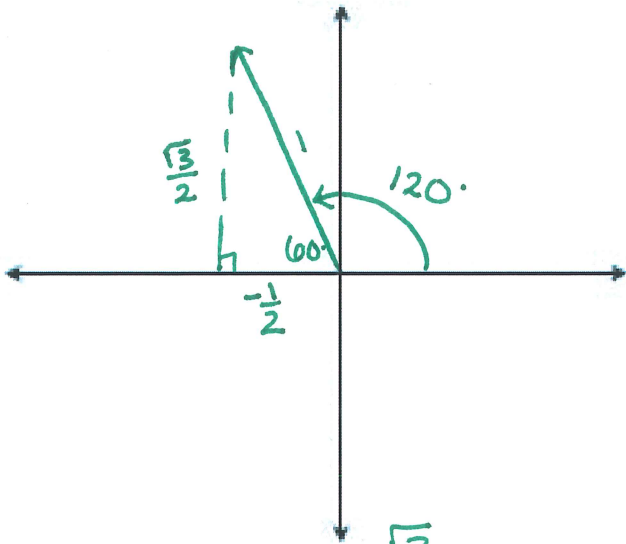
$$\boxed{\sin 60^\circ = \frac{\sqrt{3}}{2}}$$



$$\cos 300^\circ = \frac{1}{2}$$

$$\boxed{\cos 300^\circ = \frac{1}{2}}$$

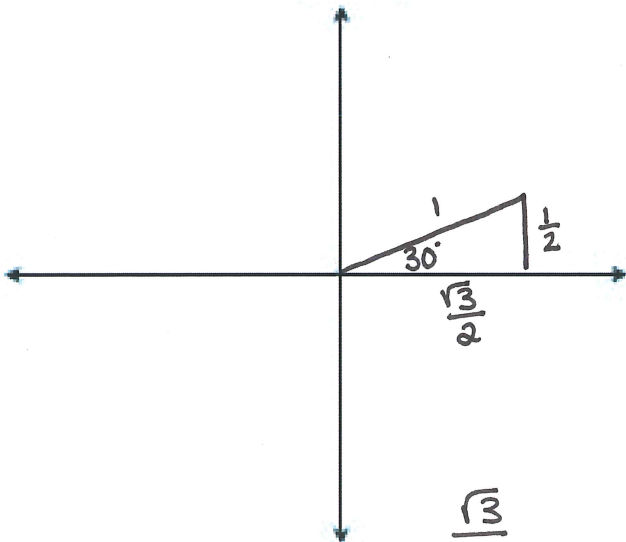
3. Find the exact value of $\sin 120^\circ$.



$$\sin 120^\circ = \frac{\frac{\sqrt{3}}{2}}{1}$$

$$\boxed{\sin(120^\circ) = \frac{\sqrt{3}}{2}}$$

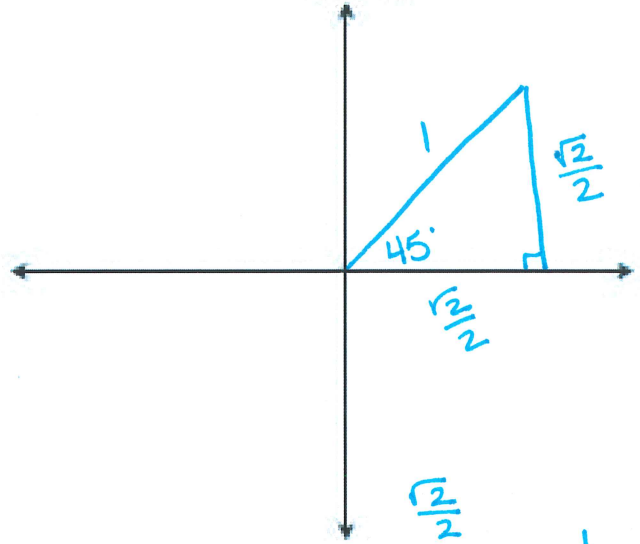
5. Find the exact value of $\cos 30^\circ$.



$$\cos 30^\circ = \frac{\frac{\sqrt{3}}{2}}{1}$$

$$\boxed{\cos 30^\circ = \frac{\sqrt{3}}{2}}$$

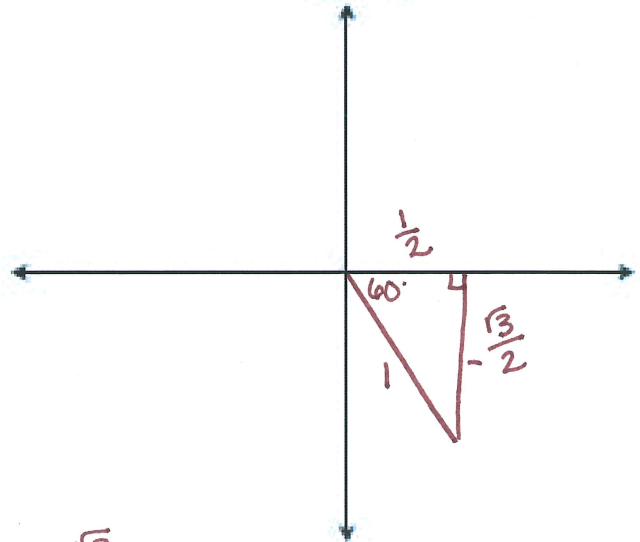
4. Find the exact value of $\tan 45^\circ$.



$$\tan 45^\circ = \frac{\frac{\sqrt{2}}{2}}{\frac{\sqrt{2}}{2}} = 1$$

$$\boxed{\tan 45^\circ = 1}$$

6. Find the exact value of $\tan 300^\circ$.



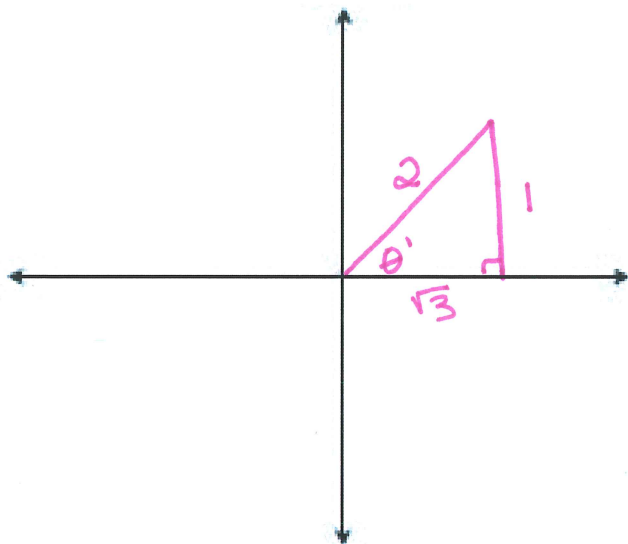
$$\tan 300^\circ = \frac{-\frac{\sqrt{3}}{2}}{\frac{1}{2}} = -\frac{\sqrt{3}}{2} \cdot \frac{2}{1}$$

$$\boxed{\tan 300^\circ = -\sqrt{3}}$$

7. If $\sin\theta = \frac{1}{2}$ and in quadrant I, complete the following:

- Construct the triangle on the coordinate plane.
- Find the value of the reference angle in degrees.
- Find the length of the missing side.
- Find the value of $\cos\theta$.

a.)



b.) Reference angle $\theta' = 30^\circ$

c.) missing side length =

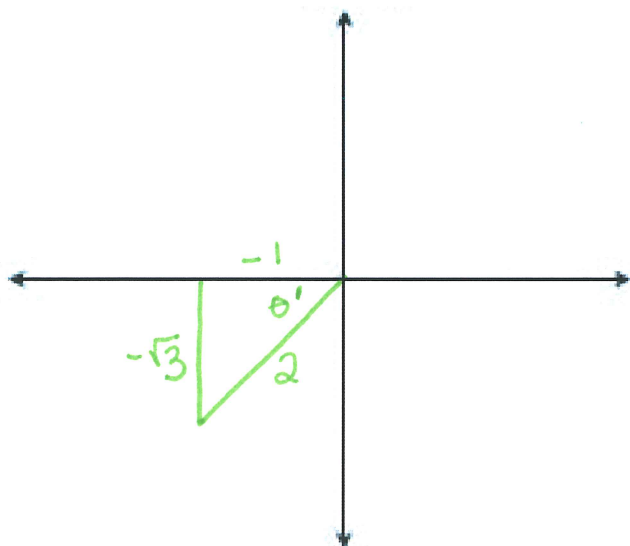
$$\begin{aligned} 1^2 + x^2 &= 2^2 \\ x^2 &= 3 \\ x &= \sqrt{3} \end{aligned}$$

d.) $\cos\theta = \frac{\sqrt{3}}{2}$

If $\cos\theta = -\frac{1}{2}$ and in quadrant III, complete the following:

- Construct the triangle on the coordinate plane.
- Find the value of the reference angle in degrees.
- Find the length of the missing side.
- Find the value of $\tan\theta$.

a.)



b.) Reference angle $\theta' =$

c.) missing side length = $(-1)^2 + y^2 = 2^2$
 $y = -\sqrt{3}$

d.) $\tan\theta = \frac{-\sqrt{3}}{-1}$

$$\boxed{\tan\theta = \sqrt{3}}$$