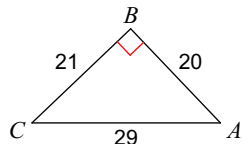


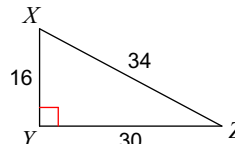
Trig Ratio Examples

Find the value of each trigonometric ratio. Simplify all fractions.

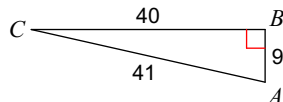
1) $\sin C$



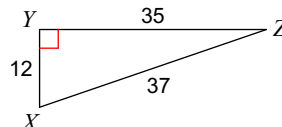
2) $\tan X$



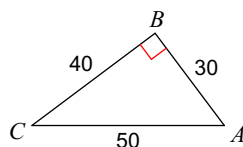
3) $\cos A$



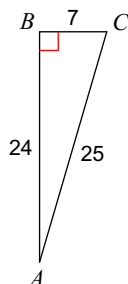
4) $\cos X$



5) $\cos A$



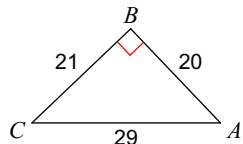
6) $\sin A$



Trig Ratio Examples

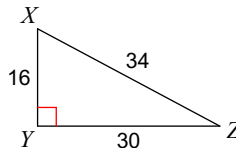
Find the value of each trigonometric ratio. Simplify all fractions.

1) $\sin C$



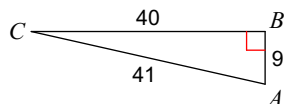
$$\frac{20}{29}$$

2) $\tan X$



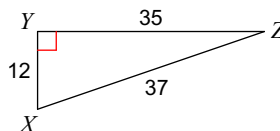
$$\frac{15}{8}$$

3) $\cos A$



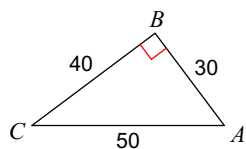
$$\frac{9}{41}$$

4) $\cos X$



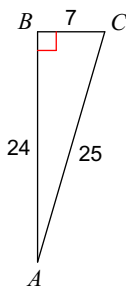
$$\frac{12}{37}$$

5) $\cos A$



$$\frac{3}{5}$$

6) $\sin A$



$$\frac{7}{25}$$