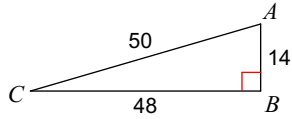


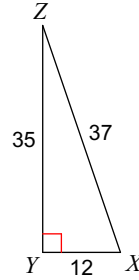
Trig Ratio HW

Find the value of each trigonometric ratio. Simplify all fractions.

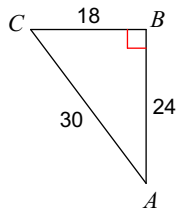
1)  $\cos C$



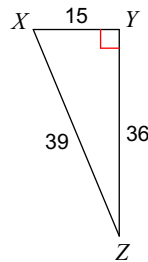
2)  $\cos X$



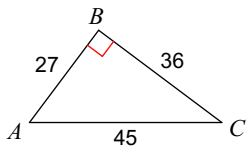
3)  $\tan A$



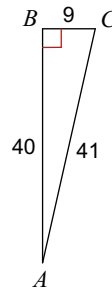
4)  $\sin Z$



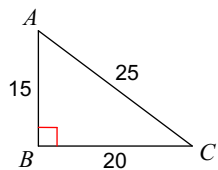
5)  $\tan A$



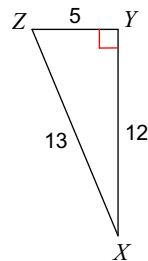
6)  $\tan C$



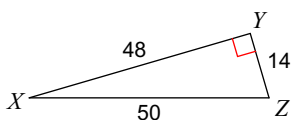
7)  $\sin C$



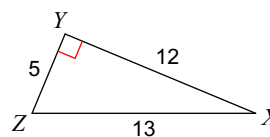
8)  $\sin Z$



9)  $\cos Z$



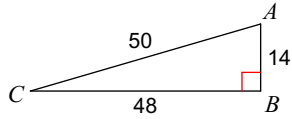
10)  $\tan Z$



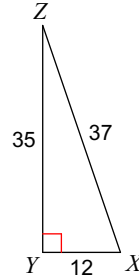
Trig Ratio HW

Find the value of each trigonometric ratio. Simplify all fractions.

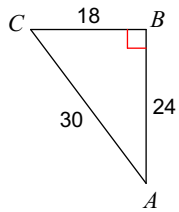
1)  $\cos C$   $\frac{24}{25}$



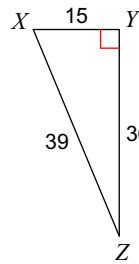
2)  $\cos X$   $\frac{12}{37}$



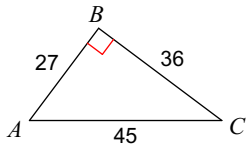
3)  $\tan A$   $\frac{3}{4}$



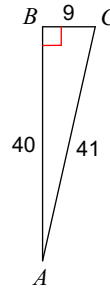
4)  $\sin Z$   $\frac{5}{13}$



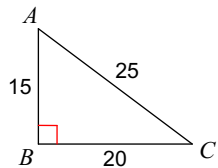
5)  $\tan A$   $\frac{4}{3}$



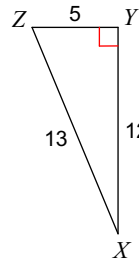
6)  $\tan C$   $\frac{40}{9}$



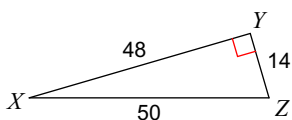
7)  $\sin C$   $\frac{3}{5}$



8)  $\sin Z$   $\frac{12}{13}$



9)  $\cos Z$   $\frac{7}{25}$



10)  $\tan Z$   $\frac{12}{5}$

